

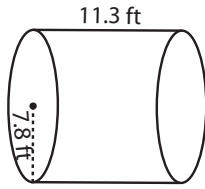
Name : \_\_\_\_\_

Score : \_\_\_\_\_

**Volume - Cylinder**

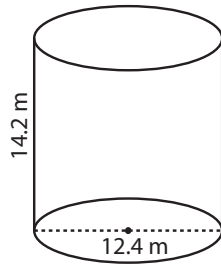
Find the volume of each cylinder. Round the answer to nearest tenth. ( use  $\pi = 3.14$  )

1)



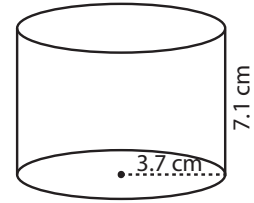
Volume = \_\_\_\_\_

2)



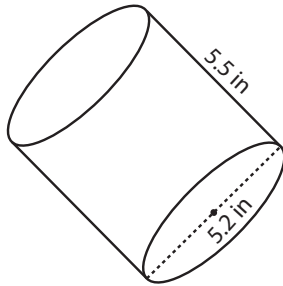
Volume = \_\_\_\_\_

3)



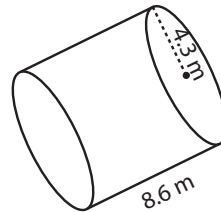
Volume = \_\_\_\_\_

4)



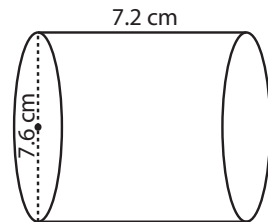
Volume = \_\_\_\_\_

5)



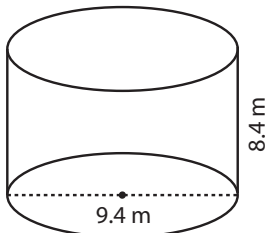
Volume = \_\_\_\_\_

6)




Volume = \_\_\_\_\_

7)



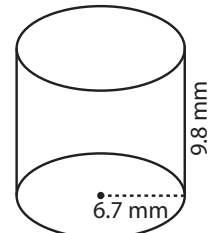
Volume = \_\_\_\_\_

8)



Volume = \_\_\_\_\_

9)



Volume = \_\_\_\_\_

10) The candy is made up of sugar syrup. Find the volume of the syrup required to make a cylindrical candy with a diameter 3.25 centimeter and height 2.15 centimeter.

Volume = \_\_\_\_\_