




HW 5-2-3 Worksheet


Name _____ # _____


Date _____ Pd. _____


 $y = -x + 4$
 $y = x + 2$


 $y = -2x - 4$
 $y = (-2/3)x + (4/3)$


 $y = -2x + 1$
 $y = 2x - 3$


 $y = -2x + 1$
 $y = -x + 1$

 $y = 1.5x - 2$
 $y = x - .5$

 $y = -.5x + .5$
 $y = -x + 4$

 $y = 2 - 2x$
 $y = x + 5$

 $y = 4 + 3x$
 $2x + 1 = y$

 $y = x - 2$
 $y = 4 - 2x$

B	M	E	F	C	D	H	D	H	D	G	M	B	F	B
F	E	B	C	H	O	D	H	O	H	D	G	M	B	F
B	I	E	D	O	M	A	O	N	B	O	H	I	K	B
E	B	F	H	D	G	I	D	E	C	H	D	M	B	K
M	F	M	A	H	D	O	H	O	H	D	N	B	K	B
B	I	F	I	A	H	D	O	O	D	N	M	F	B	K
M	E	B	E	M	O	H	D	H	O	F	I	I	M	F
B	I	E	M	E	H	O	H	D	D	B	F	B	F	B
F	M	F	B	M	A	D	O	H	N	M	I	M	B	K
I	B	I	F	E	M	A	O	N	I	K	F	I	F	M
E	M	E	M	I	B	I	M	F	M	F	B	K	I	B
C	O	G	B	O	K	F	H	M	D	J	F	D	G	H
H	L	D	F	H	M	B	O	I	H	O	B	H	A	D
O	I	O	I	D	L	I	D	F	O	L	M	O	I	O

A (-1, 4)

I (2, 1)

B (-1, 3)

J (2, 0)

C (0, 1)

K (-3, -4)

D (-4, 4)

L (-3, -5)

E (0, -1)

M (-3, 1)

F (3, 5/3)

N (7, -3)

G (3, 5/2)

O (1, -1)

H (1, 3)